

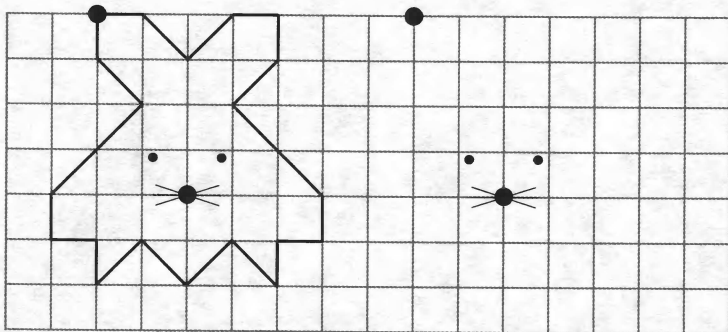
Математика

Диагностическая работа № 2 (середина учебного года). Вариант 2


Фамилия _____

Имя _____

Задание 1

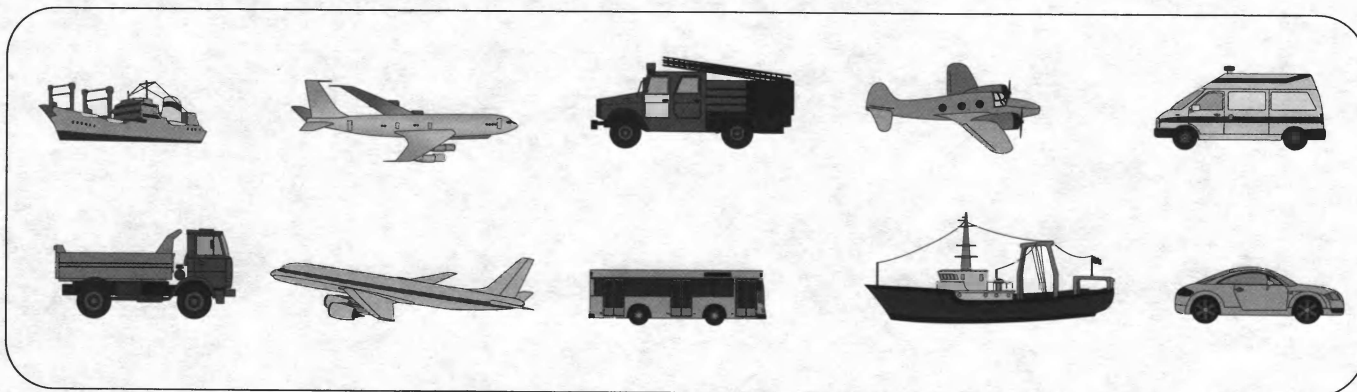


Задание 2



1 → 1 ↑ 1 ← 3 ↑ 2 → 1 ↓ 1 →

Задание 3



Задание 4


Задание 4 involves two groups of objects and corresponding counting exercises.

Group 1: Four dogs and three cats. An arrow points from the dogs to the cats. Below are four squares, three circles, and a row of four empty boxes.

Group 2: Four stars and three stars. An arrow points from the first group of stars to the second. Below are three circles, three crossed-out circles, and a row of four empty boxes.


Group 3: Seven flags and two flags. An arrow points from the first group of flags to the second. Below are two circles, two crossed-out circles, and a row of four empty boxes.

Задание 5




□ □ □ □ ○ ○ ○

4 + 3 = 8



○ ○ ○ ○ ∅ ∅ ∅

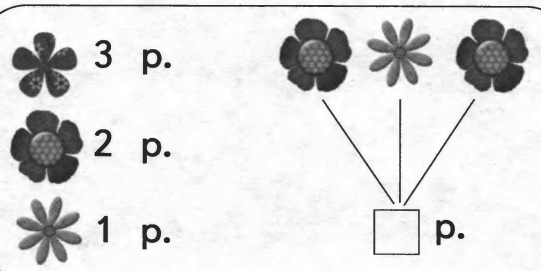
7 - 4 = 3



○ ○ ○ ○ ○ ○ ○ ∅ ∅

8 - 2 = 6

Задание 6




3 р.

2 р.

1 р.

□ р.

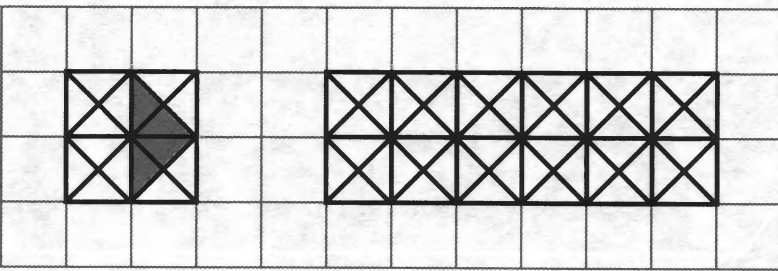
Задание 7




Задание 8

2 + 3	3 + 2	6 - 2	4 + 1
6 - 1	8 - 2	7 - 1	7 - 2

Задание 9



Сколько  - ? □