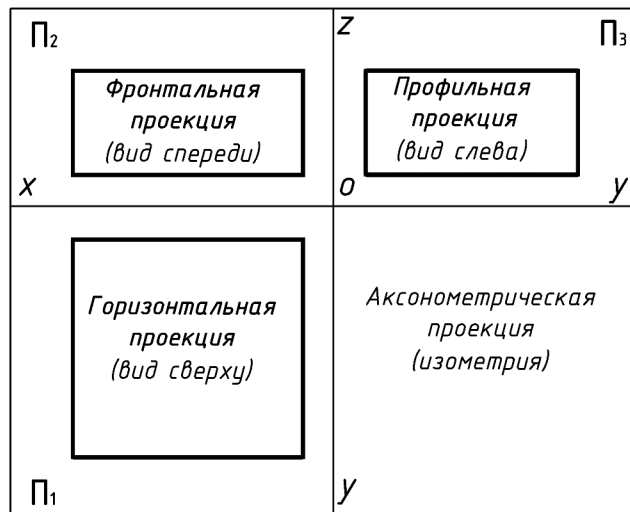


ТЕСТИРОВАНИЕ

Для заданных аксонометрических изображений
найдите три соответствующие проекции
призмы, пирамиды, цилиндра, конуса
(направление взгляда указано стрелочкой
для выбора фронтальной проекции)

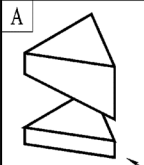
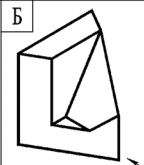
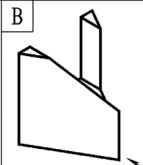
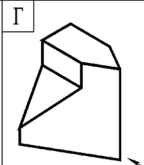
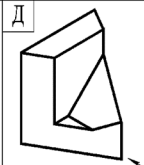
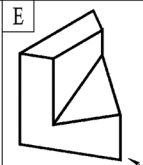
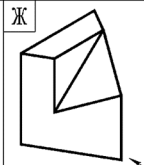
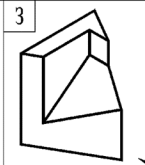
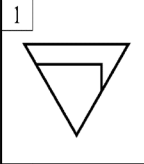
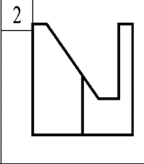
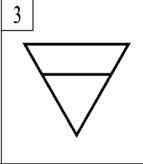
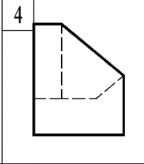
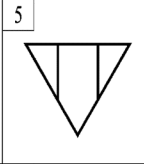
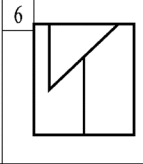
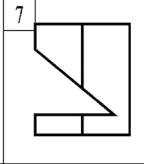
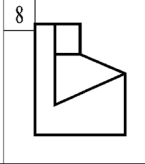
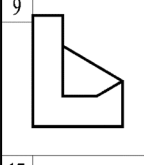
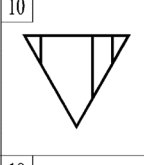
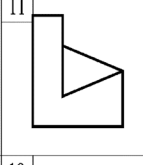
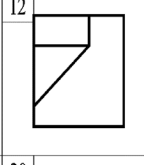
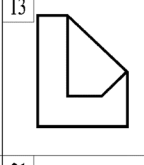
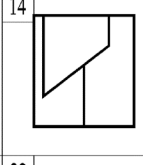
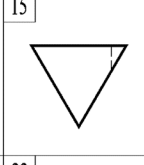
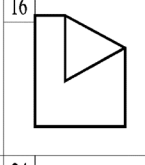
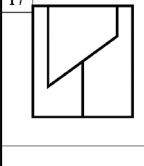
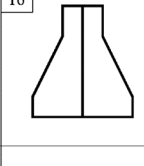
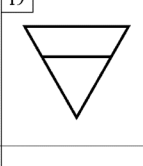
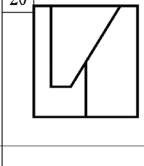
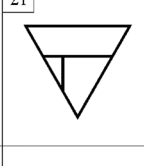
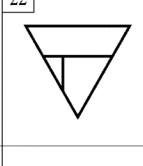
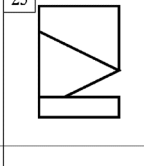
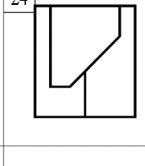

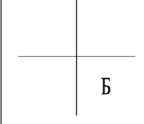
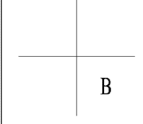
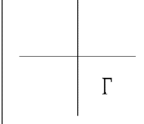


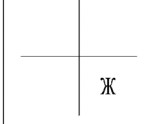
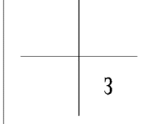
Пример ответа

12	6
9	Д

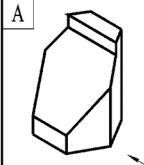
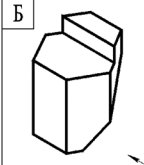
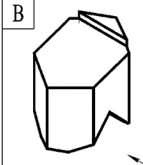
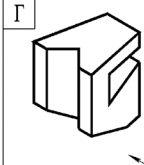
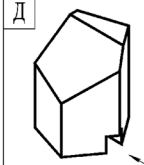
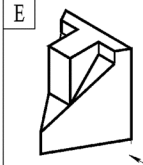
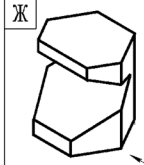
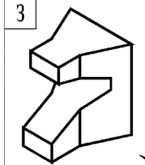
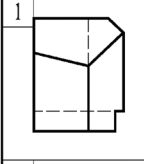
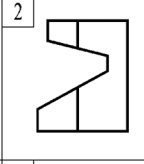
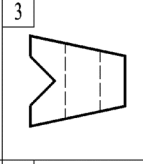
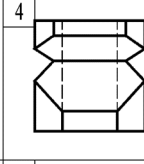
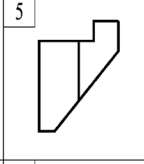
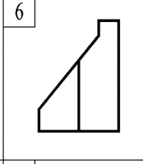
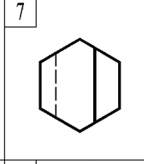
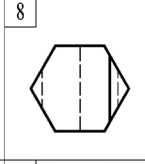
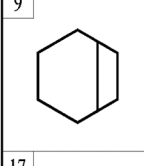
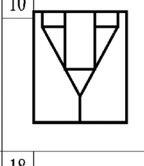
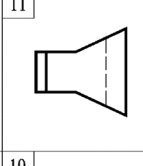
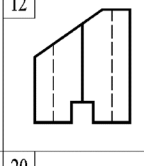
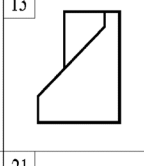
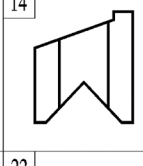
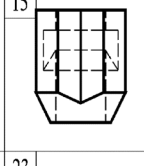
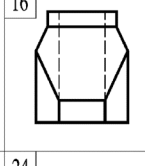
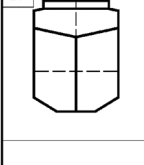
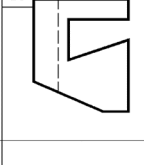
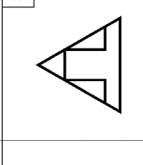
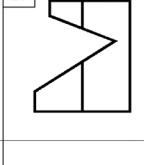
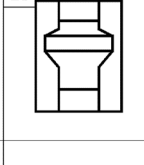
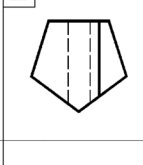
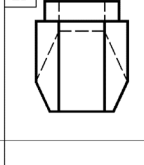
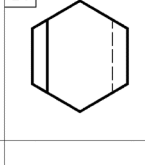
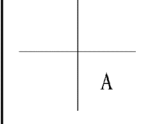
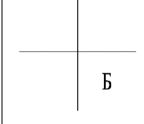
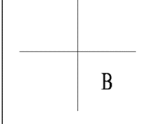
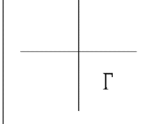
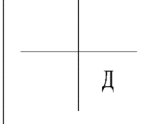
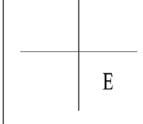
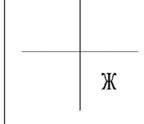
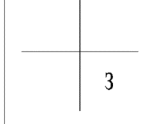


ПРИЗМА

Вариант 1

А 	Б 	В 	Г 	Д 	Е 	Ж 	З 
1 	2 	3 	4 	5 	6 	7 	8 
9 	10 	11 	12 	13 	14 	15 	16 
17 	18 	19 	20 	21 	22 	23 	24 
 А	 Б	 В	 Г	 Д	 Е	 Ж	 З

Вариант 2

А 	Б 	В 	Г 	Д 	Е 	Ж 	З 
1 	2 	3 	4 	5 	6 	7 	8 
9 	10 	11 	12 	13 	14 	15 	16 
17 	18 	19 	20 	21 	22 	23 	24 
 А	 Б	 В	 Г	 Д	 Е	 Ж	 З

ПИРАМИДА

Вариант 1

А	Б	В	Г	Д	Е	Ж	З
1	2	3	4	5	6	7	8
9	10	11	12	13	14	15	16
17	18	19	20	21	22	23	24
А	Б	В	Г	Д	Е	Ж	З

Вариант 2

А	Б	В	Г	Д	Е	Ж	З
1	2	3	4	5	6	7	8
9	10	11	12	13	14	15	16
17	18	19	20	21	22	23	24
А	Б	В	Г	Д	Е	Ж	З

ЦИЛИНДР

Вариант 1

A	Б	В	Г	Д	Е	Ж	З
1	2	3	4	5	6	7	8
9	10	11	12	13	14	15	16
17	18	19	20	21	22	23	24
A	Б	В	Г	Д	Е	Ж	З

Вариант 2

A	Б	В	Г	Д	Е	Ж	З
1	2	3	4	5	6	7	8
9	10	11	12	13	14	15	16
17	18	19	20	21	22	23	24
A	Б	В	Г	Д	Е	Ж	З

КОНУС

Вариант 1

A	Б	В	Г	Д	Е	Ж	З
1	2	3	4	5	6	7	8
9	10	11	12	13	14	15	16
17	18	19	20	21	22	23	24
A	Б	В	Г	Д	Е	Ж	З

Вариант 2

A	Б	В	Г	Д	Е	Ж	З
1	2	3	4	5	6	7	8
9	10	11	12	13	14	15	16
17	18	19	20	21	22	23	24
A	Б	В	Г	Д	Е	Ж	З

ОТВЕТЫ для самопроверки по **ТЕСТИРОВАНИЮ****ПРИЗМА**

А	Б	В	Г	Д	Е	Ж	З
А	Б	В	Г	Д	Е	Ж	З

ПИРАМИДА

А	Б	В	Г	Д	Е	Ж	З
А	Б	В	Г	Д	Е	Ж	З

ЦИЛИНДР

А	Б	В	Г	Д	Е	Ж	З
А	Б	В	Г	Д	Е	Ж	З

КОНУС

А	Б	В	Г	Д	Е	Ж	З
А	Б	В	Г	Д	Е	Ж	З